

Name _____

12

9

7

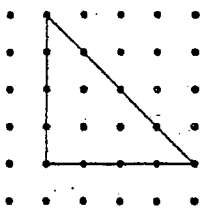
Extra Practice

1.7

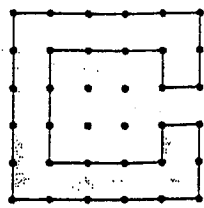
Name _____

In 1-4, find the perimeter and area of the figure. The dots are 1 unit apart horizontally and vertically and $\sqrt{2}$ units apart diagonally.

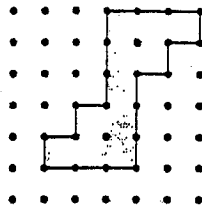
1.



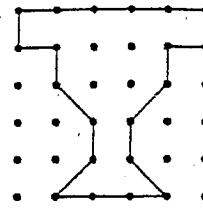
2.



3.



4.



In 5-7, use the diagram of the National Football League-sized field.

5. Find the perimeter in yards of the entire field including both end zones.
6. Find the area in square yards of the entire field including both end zones.
7. Find the area in square yards of one end zone.

